

100

IQ

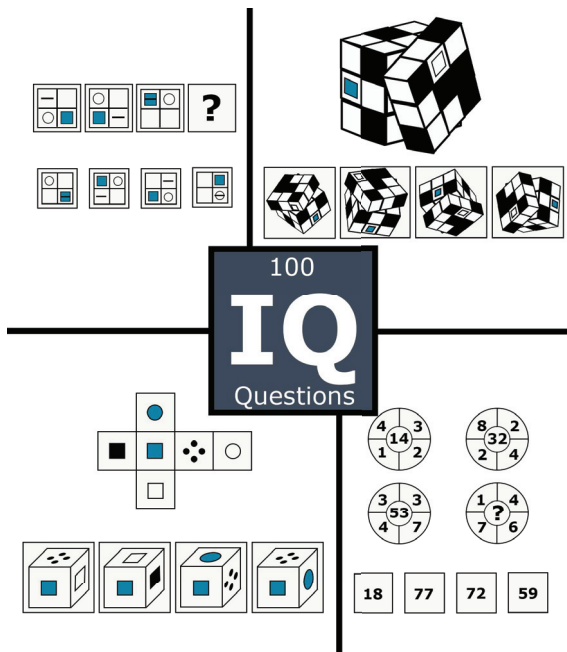
Questions

Zoe Hampton

## Introduction

This book contains 100 IQ questions - 10 types of IQ tests with 10 questions each. The questions are designed to assess your mental abilities and skills. Working through the questions will help you improve your concentration and develop the ability to interpret patterns, number sequences or the relationships between shapes.

Training your logic skills with this book will improve your IQ and build a strong foundation for academic and personal success. If you are faced with a IQ test during an assessment and have practiced with this book, you will perform much better than before.



The IQ questions in this book are designed to assess a variety of mental abilities and skills and therefore cover a wide range of different types of intelligence. The questions are grouped by types and 10 questions of each type is included. The list of question types which can be found below:

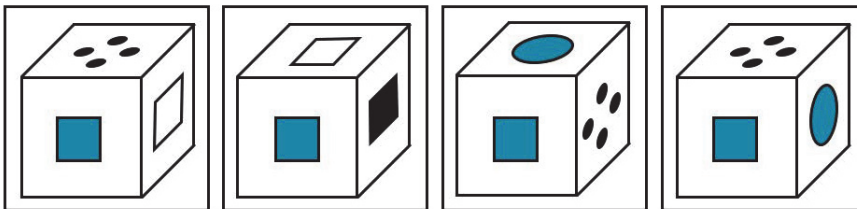
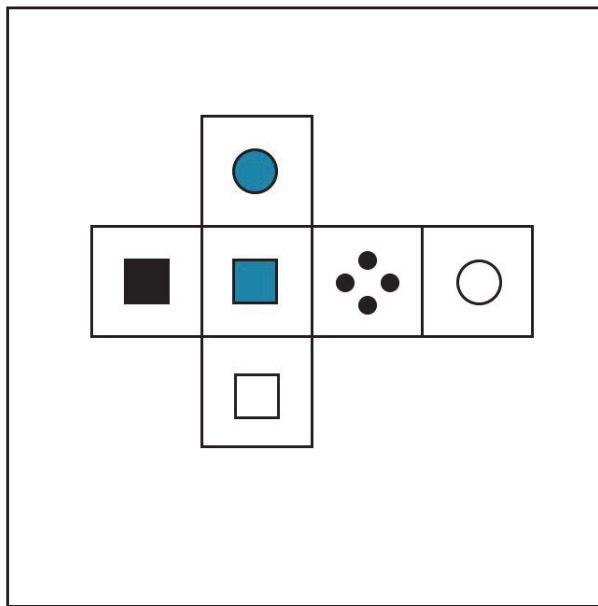
- Spatial Reasoning Test
- Diagrammatic Reasoning Test
- Deductive Reasoning Test With Figures
- Inductive Reasoning Figure Series Test
- Math Riddles Test
- Abstract Reasoning Test
- Logical Reasoning Test
- Inductive Reasoning Test
- Number Series Test
- Verbal Reasoning Test With Analogies

Disclaimer: This test is intended for informational and entertainment purposes only.

# Spatial Reasoning Test

Question 4: Which cube cannot be made based on the unfolded cube?

---



A

B

C

D

---

# Diagrammatic Reasoning Test

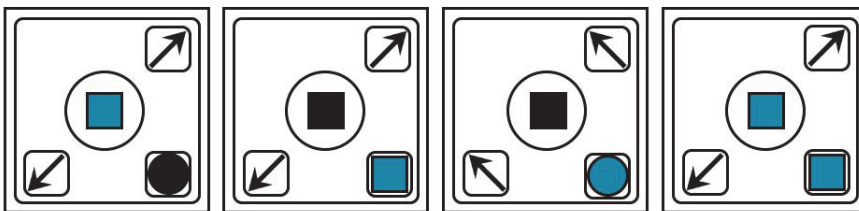
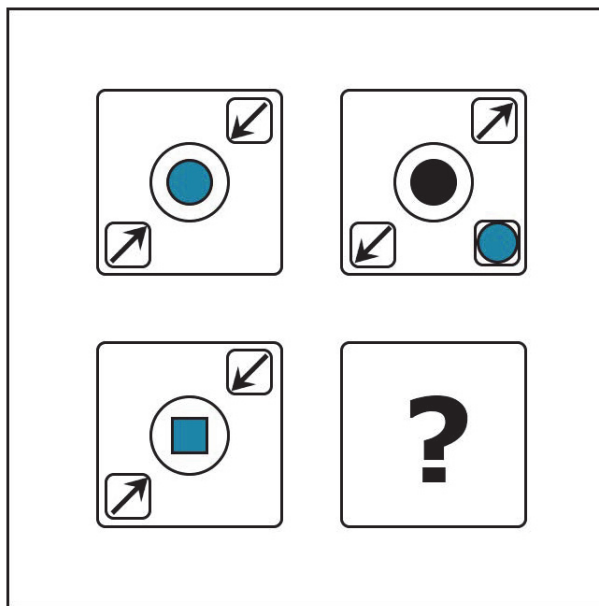
Question 5: Which operator replaces the question mark?

Change shade		
Swap first and second position		
Replace circles with squares		
Rotate 90° clockwise		

- |   |   |   |   |
|---|---|---|---|
|   |   |   |   |
| A | B | C | D |

# Inductive Reasoning Figure Series Test

Question 4: Which pattern best completes the sequence or matrix?



A

B


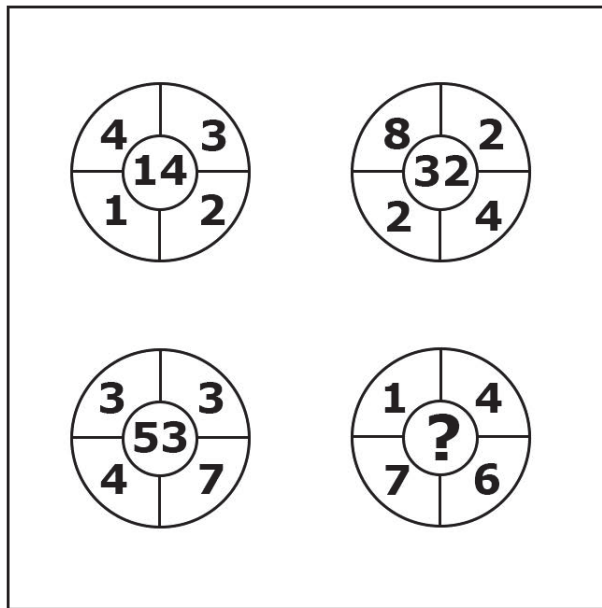
C

D

# Math Riddles Test

Question 6: What number should replace the question mark?

---



A

B

C

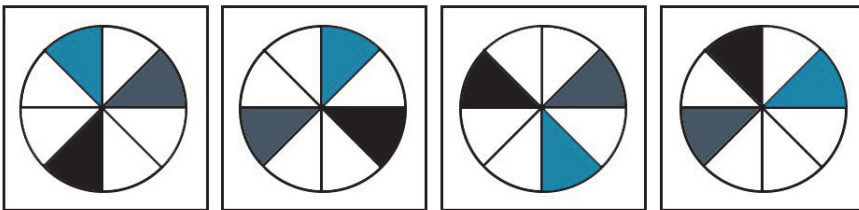
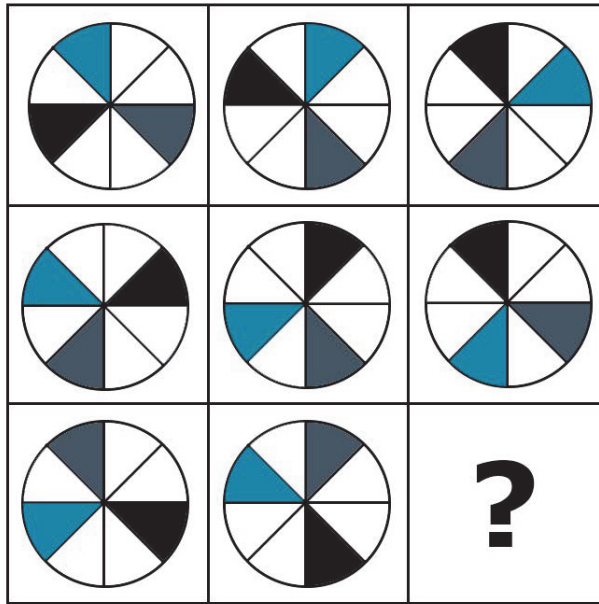
D

---

# Logical Reasoning Test

Question 8: Which of the following images completes the missing part?

---



A

B

C

D

---