



Raven's

Progressive Matrices™
Practice Book 2

100 Questions

With
Explanations

Zoe Hampton

Introduction

Raven's Progressive Matrices™

Practice Test 2

Raven's Progressive Matrices™ (often referred to simply as Raven's Matrices) or RPM is a nonverbal test typically used to measure general human intelligence and abstract reasoning, and is considered a nonverbal assessment of fluid intelligence. It is one of the most common tests used with both groups and individuals, from 5-year-olds to the elderly. This format is intended to measure the test taker's reasoning ability, the eductive ("sense-making") component of Spearman's g (g is often referred to as general intelligence). The tests were originally developed by John C. Raven in 1936. In each test item, the subject is asked to identify the missing element to complete a pattern. Many patterns are presented in the form of a 3×3 or 2×2 matrix, hence the name of the test. The test taker is given eight choices from which to select and complete the missing element.


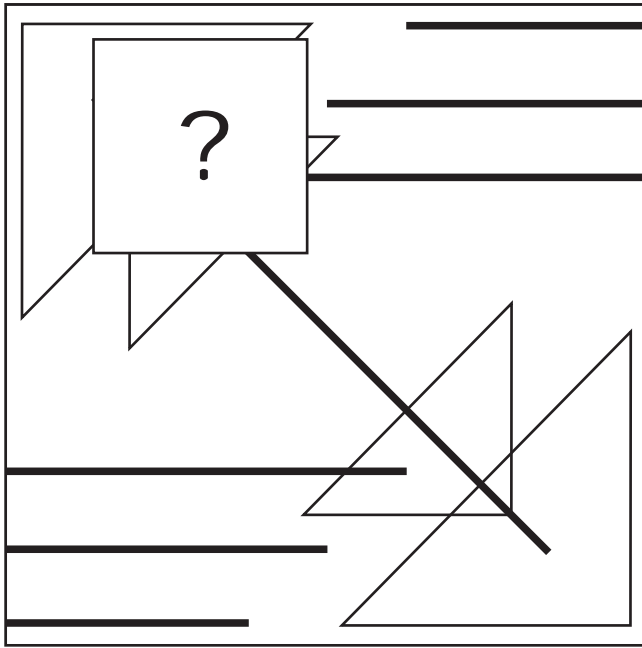
About this book

This practice book consists of 100 multiple-choice questions. Your task is to select the correct answer from a collection of eight options to complete the general pattern in the matrix. You could use pen and paper to note the given answers. The correct answers along with logic to calculate your IQ score are at the end of the book.

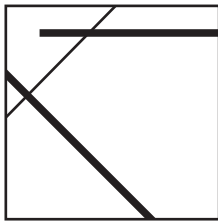
Each question includes a detailed explanation to help you understand the rule it is based on.

Raven's Standard Progressive Matrices™ is registered trademark of Pearson Education, Inc. or its affiliate(s), or their licensors. The author of this book (shortly referred as "the author") is not affiliated with nor related to Pearson Education, Inc. or its affiliates ("Pearson"). Pearson does not sponsor or endorse any author's product, nor have author's products or services been reviewed, certified, or approved by Pearson. Trademarks referring to specific test providers are used by the author for nominative purposes only and such trademarks are solely the property of their respective owners.

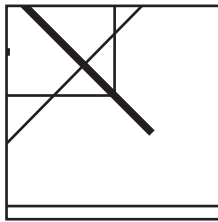
QUESTION 2



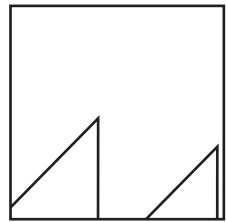
A



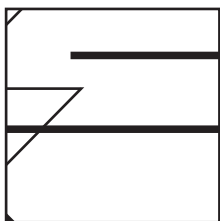
B



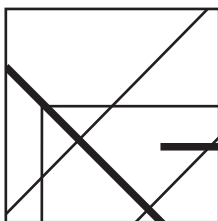
C



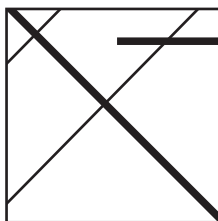
D



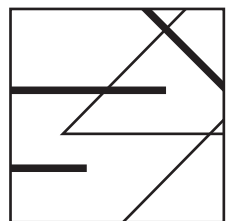
E



F

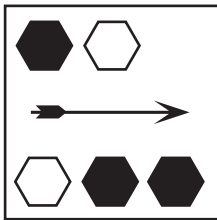



G

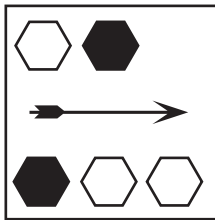


H

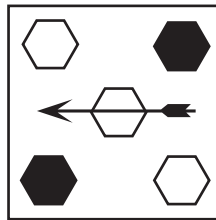
QUESTION 14



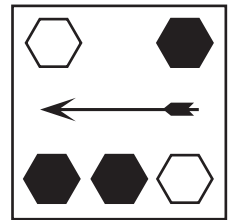
A



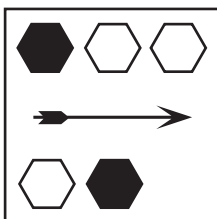
B



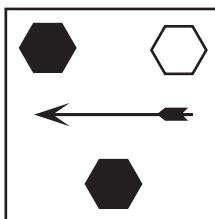
C



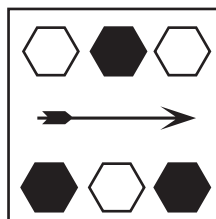
D



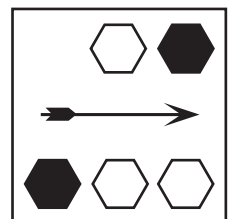
E



F


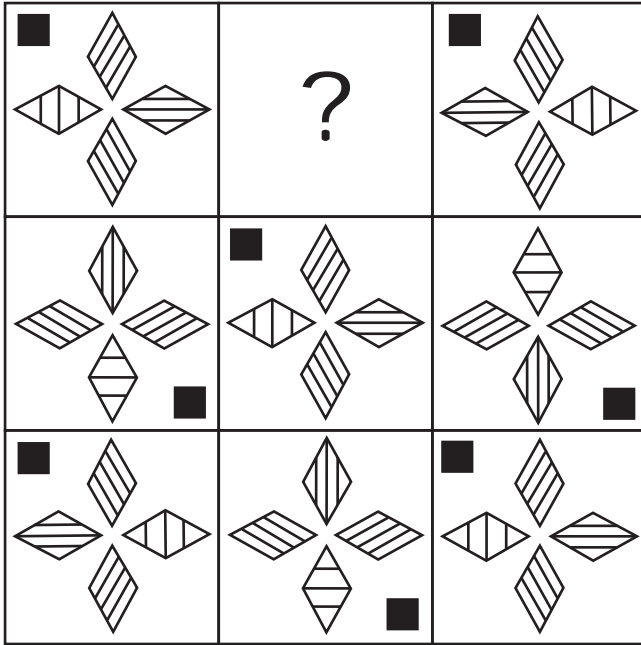


G




H


QUESTION 32




A




B




C




D




E



F

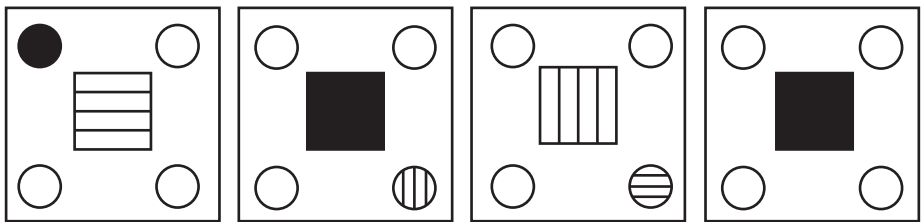
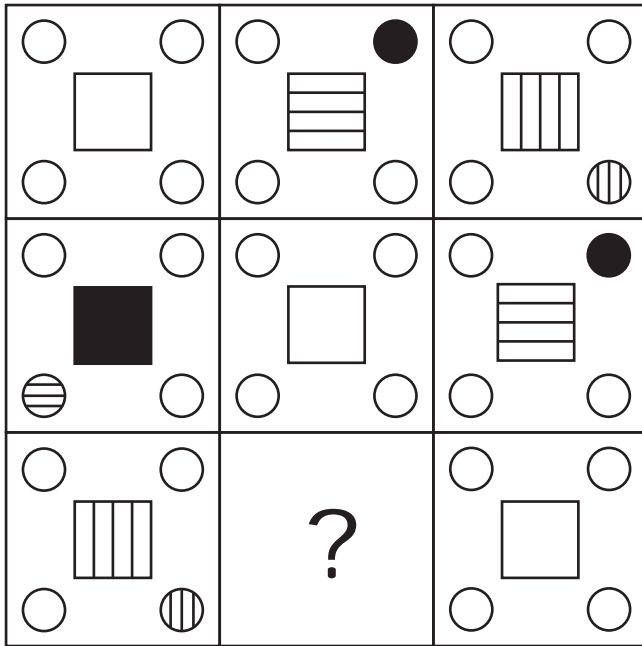


G



H

QUESTION 38

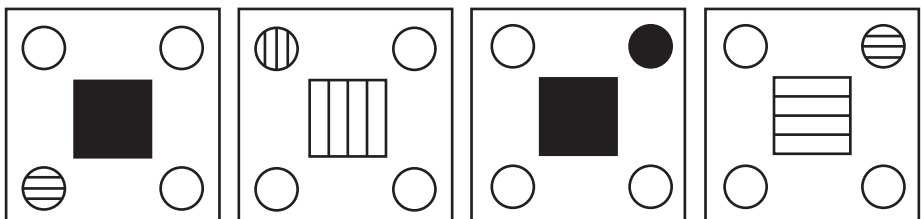


A

B

C

D



E


F

G

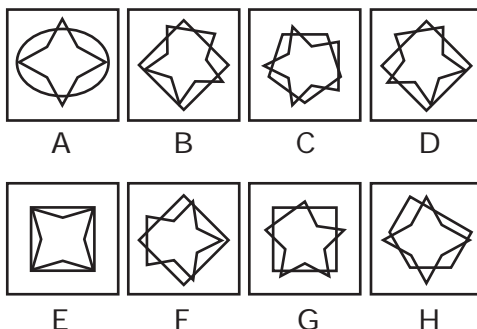
H

EXPLANATIONS

QUESTION 37

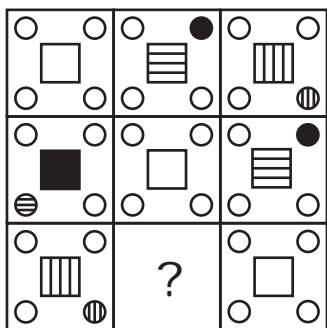


The correct answer is B

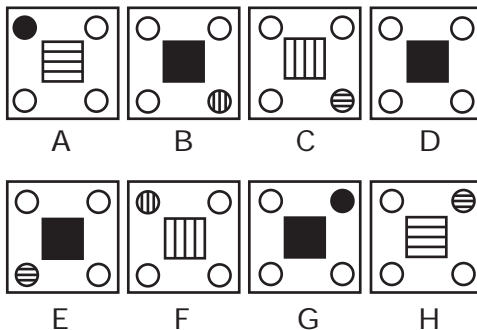


Rule 1: In each row, the shape in the last column is created by superimposing the shapes in the first and second columns.
 Rule 2: The figures in columns one and two are rotated 45 degrees clockwise in column three.

QUESTION 38



The correct answer is E



Rule 1: From left to right, the square alternates between unshaded, horizontal lines, vertical lines and shaded. This model continues to the next row.
 Rule 2: From top to bottom, the one of the circles alternates between unshaded, horizontal lines, vertical lines and shaded. The circle moves one step counterclockwise each turn. This model continues to the next column.